



КОЛЕДНО МАТЕМАТИЧЕСКО СЪСТЕЗАНИЕ

9 ДЕКЕМВРИ 2017

ПЪРВИ КЛАС

Име.....
училище, град

1.

2.

$$\begin{array}{c} \boxed{2} + \boxed{} \\ \hline \boxed{} \\ \hline \boxed{9} - \boxed{7} \end{array}$$

3.

```

graph LR
    A[ ] --> B[4]
    B --> C[ ]
    C --> D[2]
    D --> E[8]
  
```

4.

$$5 + \text{Sun} = 8$$

$$9 - \text{Sun} = 7$$

$$\text{Sun} + 6 = 8$$

$$3 + \text{Sun} = 9$$

$$\text{Sun} - 6 = 4$$

5.

$$3 + 4 \boxed{} 8$$

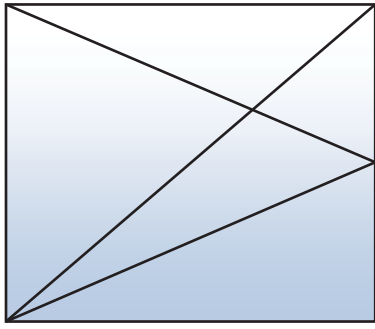
$$7 - 2 \boxed{} 4$$

$$5 + 4 \boxed{} 10$$

$$9 - 6 \boxed{} 5 - 4 + 2$$

$$6 + 4 \boxed{} 7 + 3 - 1$$

6.



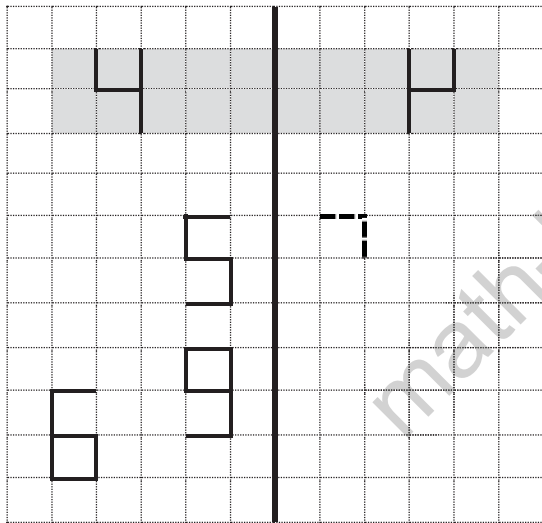
 =?

7.

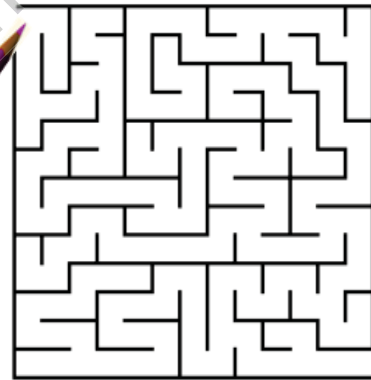


10	-	4	=	5	+	
3	+	5	=	8	-	
	-	6	=	9	-	7
8	-		=	3	+	4

8.





9.





10.



A  B = A - B + A

A  B = B - A + B

8  6 - 5  7 = - =