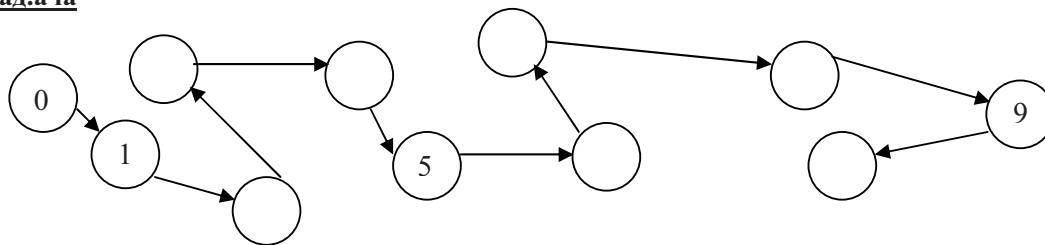


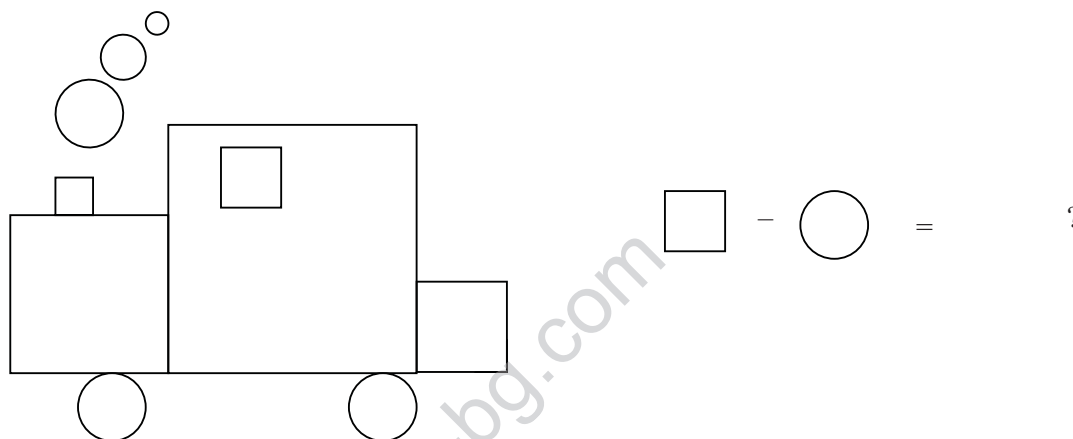
СМБ- секция Плевен, ОУ"В.Левски"-Плевен
Математическо състезание „Васил Левски“- Плевен - 19.02.2011 г.
1 клас

Имеучилище

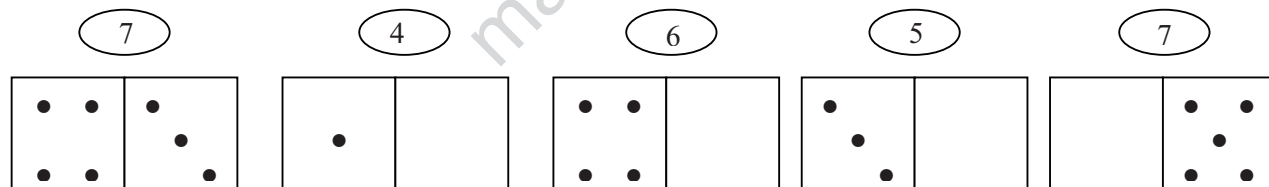
1 задача



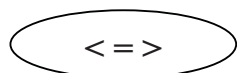
2 задача



3 задача




4 задача.



8 кг 7 кг 9 кг 9 кг 2 кг + 3 кг 9 кг 1 кг + 7 кг 4 кг + 2 кг

5 задача



6 задача: $8 + 2 + 6 = \square$

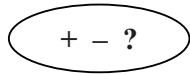
$4 + 0 + 7 = \square$

$6 + 5 + \square = 11$

$9 = 2 + 7 - \square$

$11 + 6 - 2 = \square$

7 задача



$4 \square 3 > 5$

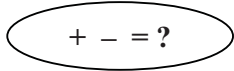
$8 \square 8 < 9$

$9 > 5 \square 4$

$6 < 7 \square 3$

$8 \square 3 = 5$

8 задача



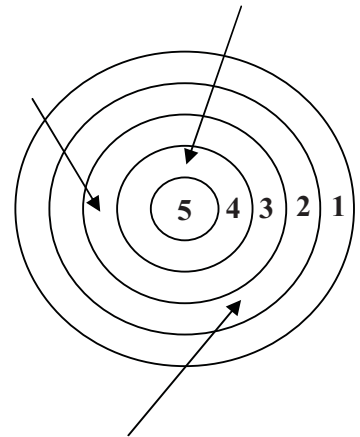
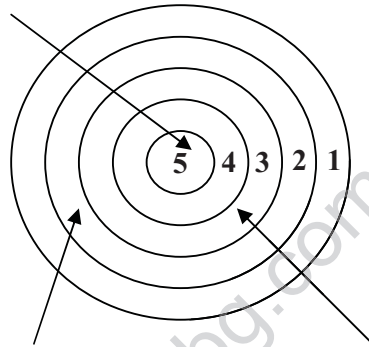
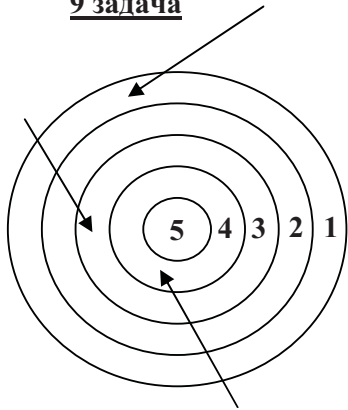
$3 \square 5 \square 2$

$2 \square 16 \square 14$

$2 \square 12 \square 14$

$2 \square 17 \square 19$

9 задача

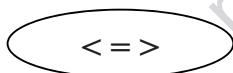


$\square + \square + \square = ?$

$\square + \square + \square = ?$

$\square + \square + \square = ?$

10 задача



$8 + 6 \square 9 + 5$

$9 + 7 \square 11 + 4$

$20 - 5 \square 9 + 6$

$18 - 3 \square 9 + 3$

$11 + 6 \square 9 + 9$

$9 + 8 \square 9 + 7$

$9 + 1 \square 20 - 11$

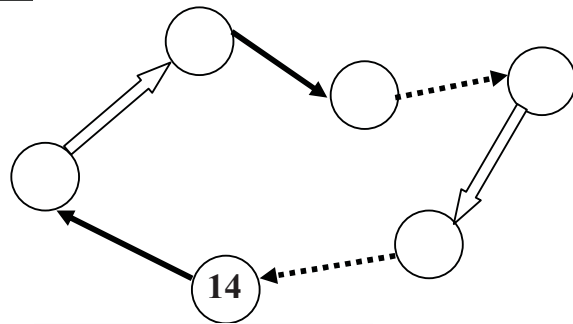
$9 + 5 \square 9 + 6$

11 задача

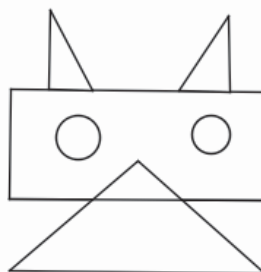
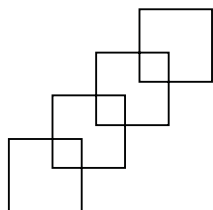
$\longrightarrow + 5$

$\cdots\cdots\cdots + 7$

$\longleftarrow - 12$



12 задача



$\square - \triangle = ?$